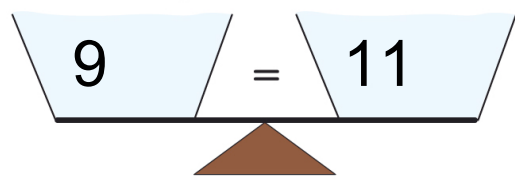
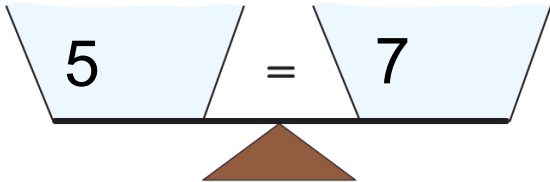


Immer gleich viel

Lernkontrolle

1. Waage



2 Pkt.

2. Lücken

$8 + \square = 10$

$4 + \square = 7$

$4 - \square = 2$

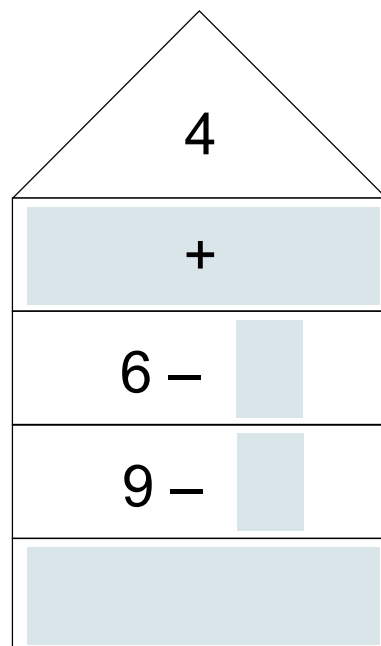
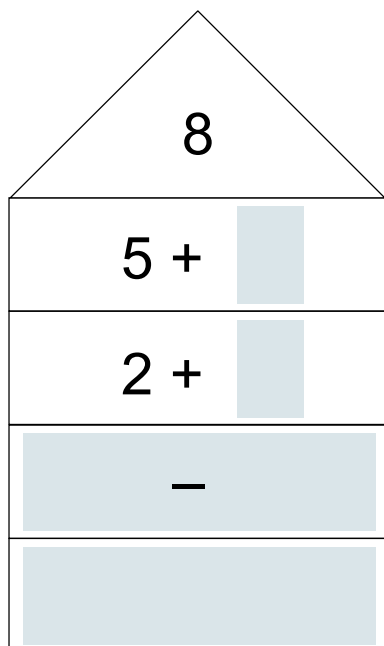
$3 + \square = 6$

$9 - \square = 1$

$8 - \square = 6$

6 Pkt.

3. Zahlenhäuser



8 Pkt.

16 Pkt.

