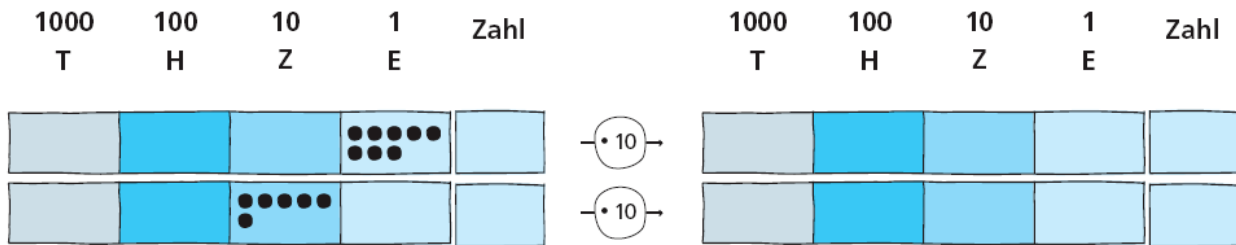


Zehner-Einmaleins Lernkontrolle

1. Verzehnfache.



2 Pkt.

2. Rechne mal 10.

$7 \cdot 10 =$

 $8 \cdot 10 =$

 $50 \cdot 10 =$

 $37 \cdot 10 =$

4 Pkt.

3. Multipliziere.

$5 \cdot 60 =$

 $3 \cdot 40 =$

 $5 \cdot 70 =$

 $9 \cdot 40 =$

$7 \cdot 90 =$

 $8 \cdot 30 =$

 $4 \cdot 50 =$

 $6 \cdot 80 =$

8 Pkt.

4. Fülle die Lücke.

$210 =$ $\cdot 30$

 $150 =$ $\cdot 3$

 $420 = 60 \cdot$

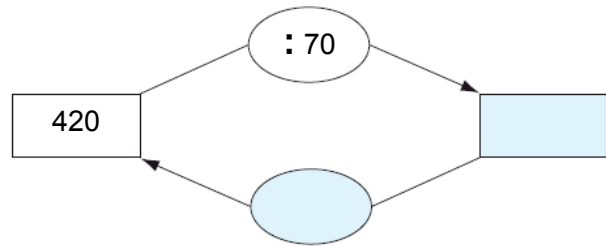
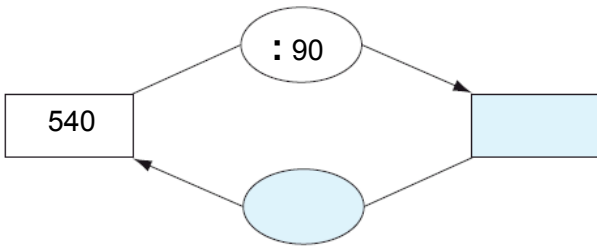
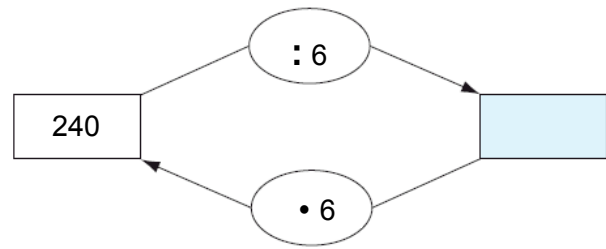
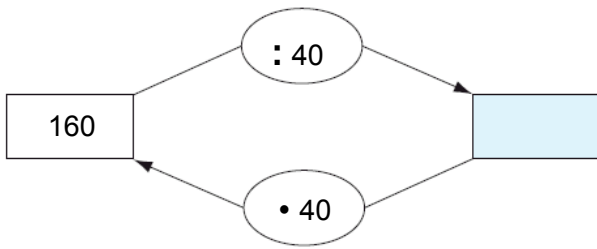
$250 =$ $\cdot 50$

 $630 =$ $\cdot 9$

 $450 = 9 \cdot$

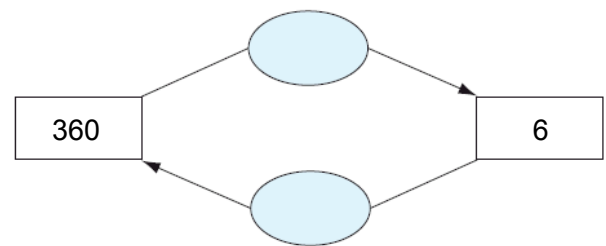
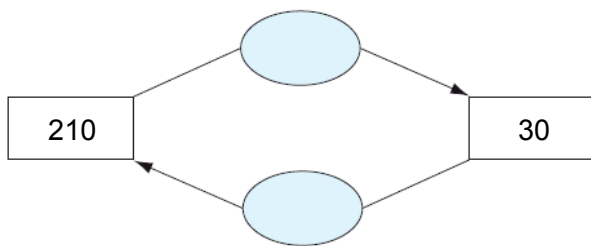
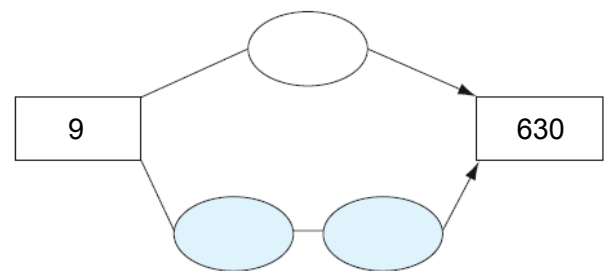
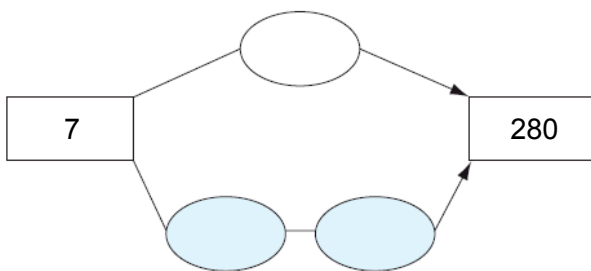
6 Pkt.

5. Dividiere.



4 Pkt.

6. Ergänze die Maschinen.



4 Pkt.

28 Pkt.

